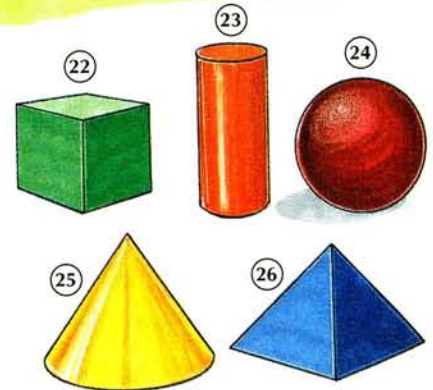
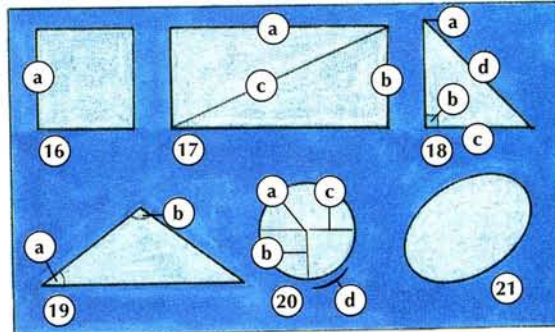
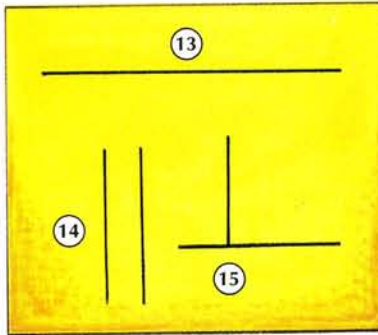
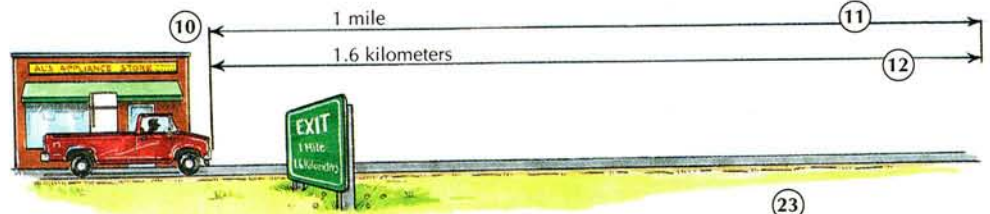

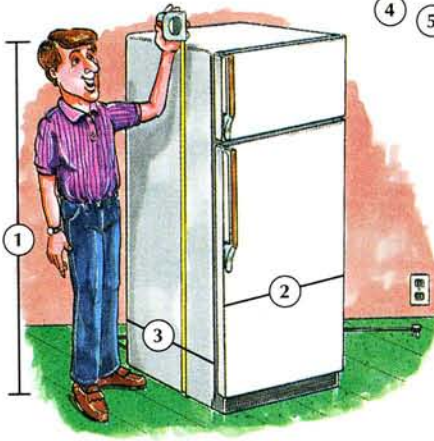


MEASUREMENTS AND GEOMETRIC SHAPES



A. Measurements

1. height
2. width
3. depth
4. length
5. inch
6. foot-feet
7. yard
8. centimeter
9. meter

10. distance

11. mile
12. kilometer

B. Lines

13. straight line
14. parallel lines
15. perpendicular lines

C. Geometric Shapes

16. square
 - a. side
17. rectangle
 - a. length
 - b. width
 - c. diagonal
18. right triangle
 - a. apex
 - b. right angle

c. base

- d. hypotenuse
19. isosceles triangle
 - a. acute angle
 - b. obtuse angle
20. circle
 - a. center
 - b. radius
 - c. diameter
 - d. circumference
21. ellipse/oval

D. Solid Figures

22. cube
23. cylinder
24. sphere
25. cone
26. pyramid



[1-9]

- A. What's the [1-4] ?
- B. [5-9] (s).



[11-12]

- A. What's the distance?
- B. (s).

1 inch (1") = 2.54 centimeters (cm)
 1 foot (1') = 0.305 meters (m)
 1 yard (1 yd.) = 0.914 meters (m)
 1 mile (mi.) = 1.6 kilometers (km)



[16-21]

- A. Who can tell me what shape this is?
- B. I can. It's a/an _____.



[22-26]

- A. Who knows what figure this is?
- B. I do. It's a/an _____.



[13-26]

- A. This painting is magnificent!
- B. Hmm. I don't think so. It just looks like a lot of _____s and _____s to me!